

Where To Download Chapter10 Polygons And Area Test Answer Key

Chapter10 Polygons And Area Test Answer Key







If you ally obsession such a referred **chapter10 polygons and area test answer key** book that will give you worth, acquire the enormously best seller from us currently from several preferred authors. If you want to humorous books, lots of novels, tale, jokes, and more fictions collections are in addition to launched, from best seller to one of the most current released.

You may not be perplexed to enjoy all ebook collections chapter10 polygons and area test answer key that we will very offer. It is not with reference to the costs. It's nearly what you dependence currently. This chapter10 polygons and area test answer key, as one of the most operational sellers here will extremely be in the midst of the best options to review.

~~Geometry Chapter 10 Section 3 Area of Regular Polygons Chapter 10: Finding the Area of Regular Polygons (Easy Mode) Chapter 10 Review Part 2: Finding the area of regular polygons and perimeter/area ratios Find the Area of Regular Polygon Given Radius Find the Area of Regular Polygons~~

~~10-3 Area of Regular Polygons Common Core Geometry. Unit #10. Lesson #3. The Area of Polygons Types of Polygons - MathHelp.com - Geometry Help~~

~~10 - SAT Math Review: Polygons Trigonometry and area 10-5~~

~~Geometry - Angles of Polygons Everything About Circle Theorems - In 3 minutes! How to score good Marks in Maths | How to Score 100/100 in Maths |       Finding the Area of a Regular Hexagon with Side Length 7 Finding the Area of a Regular Polygon Polygons | What is a Polygon? Types of Quadrilaterals and Other Polygons Polygons in the Coordinate Plane Calculating the Perimeter of Polygons area and perimeter of polygons in coordinate plane Classifying Polygons Introduction - Visualising Solid Shapes - Chapter 10 - NCERT Class 8th Maths Geometry - Chapter 10 Review (Circles)~~

~~Geometry - Chapter 11 Review (Area of Polygons and Circles)~~

~~"Mensuration" Chapter 10 - Introduction - Class 6th Maths~~

~~Introduction - Mensuration - Chapter 11 - NCERT Class 8th Maths~~

~~Split the following shapes into rectangles and find their areas. (The measures are given in cent... 6th Grade Go Math Chapter 10 Math Test Review Math - What is a Polygon and its different types - English Chapter10 Polygons And Area Test~~

~~Area Test Answer Key Chapter10 Polygons And Area Test Chapter10~~

~~Polygons And Area Test Chapter 10 Test Name: Date: 2 The two regular polygons shown are similar The area of the smaller figure is about 390 cm² Choose the best estimate of the area of the larger figure 12 cm 9 cm A B D about 220 crn² about 870 cm² about 520 crn² about 690 cm² [EPUB ...~~

~~Chapter10 Polygons And Area Test Answer Key~~

Where To Download Chapter10 Polygons And Area Test Answer Key

you can receive and get this chapter10 polygons and area test answer key sooner is that this is the record in soft file form. You can retrieve the books wherever you desire even you are in the bus, office, home, and additional places. But, you may not compulsion to change or bring the cd print wherever you go. So, you won't have heavier sack to carry.

Chapter10 Polygons And Area Test Answer Key

Chapter10 Polygons And Area Test Answer Key CHAPTER 10 Area of Polygons - Barrington High School 404Chapter 10 Polygons and Area If all of the diagonals lie in the interior of the figure, then the polygon is convex. If any part of a diagonal lies outside of the figure, then the polygon is concave. Chapter 10 Area Of Polygons - edugeneral.org

Chapter10 Polygons And Area Test Answer Key | calendar ...

Chapter10 Polygons And Area Test Chapter10 Polygons And Area Test Chapter 10 Test Name: Date: 2 The two regular polygons shown are similar The area of the smaller figure is about 390 cm² Choose the best estimate of the area of the larger figure 12 cm 9 cm A B D about 220 crn² about 870 cm² about Page 3/10

Chapter10 Polygons And Area Test Answer Key

Chapter 10 Area of Polygons | Geometry Quiz - Quizizz CHAPTER 10 Area of Polygons Lesson 10.1 Area of Triangles Identify a base and a height for each triangle. 1. A B C 2. T P Q R For each triangle, label a base with the letter b and a height with the letter h. 3. A B C D 4. E F 5. G H K 6. P Q © Marshall Cavendish International (Singapore) Private Limited.

Chapter 10 Area Of Polygons

Chapter10 Polygons And Area Test Answer Key CHAPTER 10 Area of Polygons - Barrington High School 404Chapter 10 Polygons and Area If all of the diagonals lie in the interior of the figure, then the polygon is convex. If any part of a diagonal lies outside of the figure, then the polygon is concave. Chapter 10 Area Of Polygons - edugeneral.org

Chapter 10 Area Of Polygons

Read Free Chapter10 Polygons And Area Test Answer Key Chapter 10 Test Name: Date: 2 The two regular polygons shown are similar The area of the smaller figure is about 390 cm² Choose the best estimate of the area of the larger figure 12 cm 9 cm A B D about 220 crn² about 870 cm² about 520 crn² about 690 cm² [EPUB] Chapter10 Chapter10 Polygons And Area Test

Chapter10 Polygons And Area Test Answer Key

Bookmark File PDF Chapter10 Polygons And Area Test Answer Key chapter10 polygons and area test answer key is available in our digital library an online access to it is set as public so you can

Where To Download Chapter10 Polygons And Area Test Answer Key

get it instantly. Our book servers saves in multiple countries, allowing you to get the most less latency time to download any of our books like this one.

Chapter10 Polygons And Area Test Answer Key

Chapter10 Polygons And Area Test Answer Key ipostpix org. Geometry Area Test Mu Alpha Theta. Chapter10 Polygons And Area Test Answer Key cetara de. Chapter 7 Resource Masters d2ct263enury6r cloudfront net. Chapter 10 Area Of Polygons Answers answertests com. Geometry 9780030995750 Homework Help and

Chapter10 Polygons And Area Test Answer Key

'Chapter10 Polygons And Area Test Answer Key cetara de May 8th, 2018 - Download and Read Chapter10 Polygons And Area Test Answer Key Chapter10 Polygons And Area Test Answer Key Bring home now the book enPDFd chapter10 polygons and area test answer key to be your sources when going to' 'Chapter 7 Resource Masters d2ct263enury6r cloudfront net

Chapter10 Polygons And Area Test Answer Key

Acces PDF Chapter10 Polygons And Area Test Answer Key Preparing the chapter10 polygons and area test answer key to edit every hours of daylight is adequate for many people. However, there are still many people who then don't bearing in mind reading. This is a problem. But, gone you can maintain others to start reading, it will be better.

Chapter10 Polygons And Area Test Answer Key

Chapter10 Polygons And Area Test Chapter 10 Test Name: Date: 2 The two regular polygons shown are Page 8/25. Read PDF Chapter10 Polygons And Area Test Answer Key similar The area of the smaller figure is about 390 cm² Choose the best estimate of the area of the larger figure 12 cm 9 cm A B D about 220 crn²

Chapter10 Polygons And Area Test Answer Key

Chapter 10 – Area Study Guide and Review 10.1 – Areas of Parallelograms and Triangles A parallelogram is a quadrilateral (four-sided figure) with both pairs of opposite sides parallel. $A = bh$ A triangle is any three sided polygon. $A = \frac{1}{2}bh$ **The base and height must intersect at a right angle!**

Chapter 10 Area Study Guide and Review

View Test Prep 10 3 worksheetbookwork docx from MATH 281 at Grossmont College 10 3 Areas of Regular Polygons Class Name Date Find the area of each regular polygon with the given apothem a and side Perimeter and area of polygons are introduced in this unit Perimeter of polygons and perimeter of regular polygons are covered The difference between

Where To Download Chapter10 Polygons And Area Test Answer Key

Copyright code : a887e1c5df2bf51c11588574752b07e8